











Seva School Homework for Autumn 2nd half-term 2022

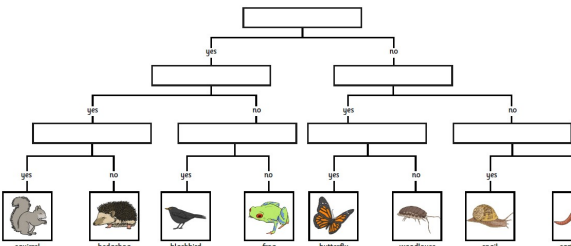
Autumn 2nd half-term theme is: Africa / Living Things and Their Environment

Year: 4

Classes: 4A and 4S

Information for parents/carers: Information for parents/carers: Each week your child will be expected to pick one challenge from the three given in each subject area below. Over the course of a half term, your child will be expected to have completed six challenges altogether and these must be one from each subject area. Homework books will be expected in school every Wednesday and will be returned every Friday. MyMaths, RockStar and MyON will be monitored by your child's class teacher weekly. If you have any questions regarding the homework, please speak to your child's class teacher for further information and support. Thank you.

Subject	Challenge 1	Challenge 2	Challenge 3
English: <i>Stories From Other Cultures</i> <i>Newspaper reports</i> <i>Haiku</i>	Watch a Tinga Tales story then retell the story in your own words. https://www.bbc.co.uk/cbeebies/shows/tinga-tinga-tales#episodes	Watch Newsround then write a newspaper report about one of the stories. https://www.bbc.co.uk/newsround/news/watch_newsround	Write your own Haiku poem about a subject of your choice. Check that you have used the correct amount of syllables for each line.
Reading	Read for at least 10 minutes each night and record in the reading diary. Visit: https://www.oxfordowl.co.uk https://www.myon.com/login/index.html		
Maths: <i>MyMaths Online</i> <i>Problem solving and reasoning.</i> <i>Multiplication and division.</i>	<p>Little has size 2 boots. </p> <p>Middle has size 3 boots. They are one and a half times the length of Little's boots. </p> <p>Big has size 5 boots. A little boot and a middle boot are the same length as a big boot. </p> <p>They start with the heels of their boots on the same line. </p> <p>They each walk heel to toe. </p> <p>When will all three heels be in line again?</p>	<p>Maisie had between 30 and 50 breadcrumbs. </p> <p>She counted the breadcrumbs in fours. There were 2 left over.</p> <p>She counted them in fives. There was 1 left over.</p> <p>How many breadcrumbs did Maisie have?</p>	<p>Use 14 ducks each time. </p> <ol style="list-style-type: none"> Make each pond hold two ducks or five ducks.  Make each pond hold twice as many ducks as the one before.  Make each pond hold one less duck than the one before. 
Online Maths	Visit: https://login.mymaths.co.uk/login - complete one activity each week. https://trockstars.com/ - complete 5 minutes each night.		

<p>Science:</p> <p><i>Living Things and Their Habitats</i></p>	<p>Copy out the key and use the following questions: Is it a mammal? Does it have legs? Is it a vertebrate? Does it have feathers? Does it have a tail? Does it have wings? Does it have a shell?</p> 	<p>Choose at least three different invertebrates and write a fact file about each one. Remember to explain about their habitat, where they are on a food chain and include labelled diagrams.</p>	<p>Use the following link and complete the activities.</p> <p>https://www.bbc.co.uk/bitesize/articles/zrckg7h</p> <p>Record in your homework book exactly what you have done.</p>
<p>RE:</p> <p><i>Faith</i></p>	<p>Find out and write about at least three different Hindu Gods (different forms of Brahman). Include a drawing or picture.</p>	<p>Recall the story of Guru Nanak's life. Draw a family tree of all the members in his family.</p>	<p>Use events in the story of the first Nativity as inspiration to write a message in a Christmas card a Christian would like to read.</p>
<p>Geography:</p> <p><i>Africa</i></p>	<p>Answer the following questions:</p> <ol style="list-style-type: none"> _____ is a continent. The smallest country is _____. The largest country is _____. Four countries in Africa are _____, _____, _____ and _____. There are _____ countries altogether in Africa. On the west of the African coast is the _____ ocean. On the east of the African coast is the _____ ocean. The _____ sea is North of the African coast. A river in Africa is _____. A lake in Africa is _____. 	<p>Draw and label at least 10 different flags from African countries.</p>	<p>Find out about the mountains and rivers of Africa.</p> <p>Draw and label them on a map of Africa.</p> <p>Write ten facts about rivers and mountains in Africa.</p>
<p>Art or DT:</p> <p><i>Artefacts and Drawing</i></p>	<p>Make a beaded necklace. Use the colours in an African flag to inspire you.</p>	<p>Create a collage depicting different African animals.</p>	<p>Create an information booklet about different African artists.</p>

